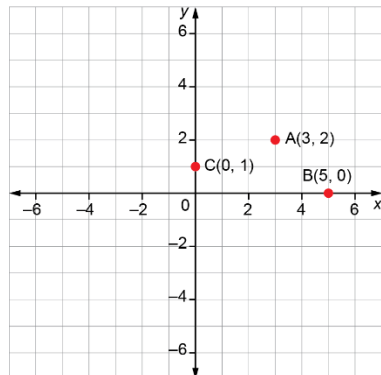


Activity 8 Assessment

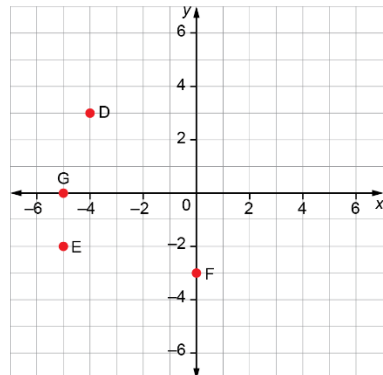
Exploring the Cartesian Plane

Exploring the Cartesian Plane

Plots points in the first quadrant of a Cartesian plane

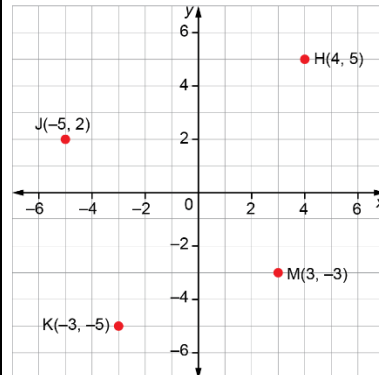


Writes the coordinates of points in all 4 quadrants of a Cartesian plane

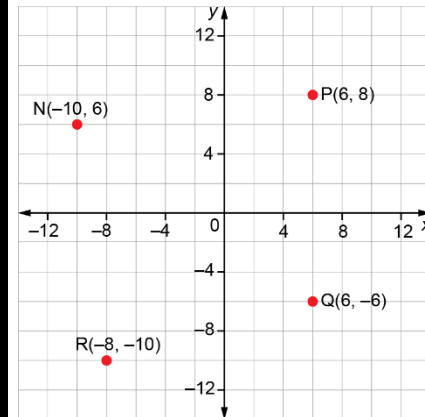


D(-4, 3); E(-5, -2);
F(0, -3); G(-5, 0)

Plots points in all 4 quadrants of a Cartesian plane



Plots points in all 4 quadrants with axes for which the scale is not 1 square represents 1 unit



Observations/Documentation